

Name: \_\_\_\_\_

Week 7 Day 1

Complete the number sentence.

$$\begin{array}{r} 25 \\ +37 \\ \hline \end{array}$$

$$\begin{array}{r} 44 \\ +32 \\ \hline \end{array}$$

Is 17 even or odd?



\_\_\_\_\_

What is 10 more than?

$78 \text{ _____}$

$32 \text{ _____}$

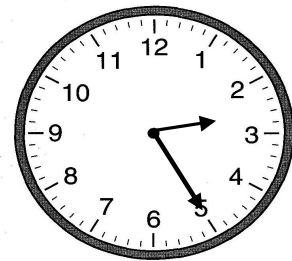
$46 \text{ _____}$

Use the commutative property to complete the number sentence.

$5 + 6 = \text{___} + 5$

$3 + 7 = 7 + \text{___}$

Write the time.



\_\_\_\_\_ : \_\_\_\_\_

Add

$5 + 5 + 4 + 6 = \text{_____}$

$3 + 4 + 3 + 6 = \text{_____}$

Week 7 Day 2

Skip count by 10 starting with 22.

22, \_\_\_\_\_, \_\_\_\_\_, \_\_\_\_\_, \_\_\_\_\_

Circle the greatest number.

a)  $600 + 50 + 7$

b)  $300 + 70 + 8$

c)  $600 + 50 + 9$


d)  $600 + 80$

Write the number in standard form.

$700 + 50$

\_\_\_\_\_

Write the time.



\_\_\_\_\_ : \_\_\_\_\_

Name: \_\_\_\_\_

### Week 7 Day 3

Complete the number sentence.

$___ + 6 = 13$

$9 + ___ = 15$

$15 - ___ = 6$

$___ - 8 = 9$

How much money?



What is the biggest number you can make with the numbers below?

8      9      4

\_\_\_\_\_


Circle the group of numbers that are from least to greatest.

a) 16, 26, 52, 35

b) 16, 52, 35, 26

c) 16, 26, 35, 52

How many sides and vertices?



\_\_\_\_\_ sides      \_\_\_\_\_ vertices

Complete the number sentence.

$___ + 5 = 11$

$9 + ___ = 14$

$14 - ___ = 7$

$___ - 6 = 7$

### Week 7 Day 4

Skip count by 5 starting with 40.

40, \_\_\_\_\_, \_\_\_\_\_, \_\_\_\_\_, \_\_\_\_\_, \_\_\_\_\_

How many hundreds, tens and ones?

498

\_\_\_\_\_ hundreds

\_\_\_\_\_ tens


\_\_\_\_\_ ones

Write the number in expanded form.

816

\_\_\_\_\_

Partition (divide) the circle into 2 equal parts.



Name: \_\_\_\_\_

**Week 7 Day 5**

Complete the number sentence.

$$\begin{array}{r} 48 \\ +50 \\ \hline \end{array}$$

$$\begin{array}{r} 39 \\ +44 \\ \hline \end{array}$$

Write the numbers in order from least to greatest.

34, 89, 45, 94, 21

\_\_\_\_\_

Write the value of the underlined digit.

407 \_\_\_\_\_

407 \_\_\_\_\_

407 \_\_\_\_\_


Write the number in word form.

483

\_\_\_\_\_

\_\_\_\_\_


Write the time.



\_\_\_\_\_ : \_\_\_\_\_

**Week 7 WP**

Braelynn went to a movie at the time shown on the clock. The movie lasted 3 hours. What time did the movie end?



\_\_\_\_\_