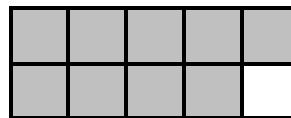


Name: _____

Week 26 Day 1


45	25
43	43
50	23
<u>+ 24</u>	<u>+ 9</u>

Count the shaded squares by 2s to determine if the number is even or odd. even / odd




Explain how you know it is even or odd.

Divide the rectangle below into 4 rows with 3 equal sized squares in each row.

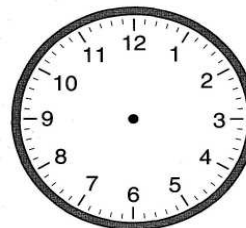



of units _____

Use repeated addition to show the number of objects in the array by rows..



Show 4:25 on each clock.



Braxton has 4236 baseball cards. What is the value of the 2 in the number above? _____

He sold 345 baseball cards to a friend. How many baseball cards does he have left over?

Week 26 Day 2

Laynee is counting by 5. Circle the spot where she messed up.

165, 170, 175, 180, 185, 190, 195, 200, 25, 210, 215, 220

What should she have written? _____

Circle the expressions that are true.

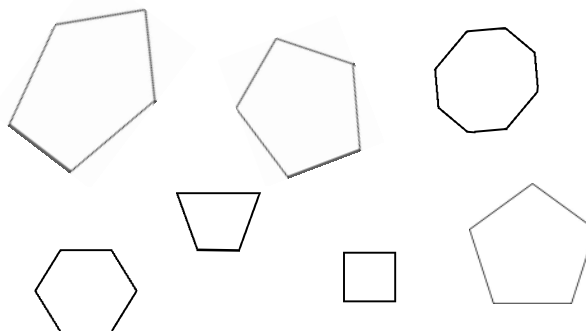
546 > 849

658 > 654

435 < 834

345 = 543

Circle the pentagons below.



Name: _____

Week 26 Day 3

Complete the number sentence.

$$49 - a = 43$$

$$a = \underline{\quad}$$


$$400 + b + 3 = 453$$

$$b = \underline{\quad}$$

How much money? _____



Shade in boxes to match the repeated addition below.



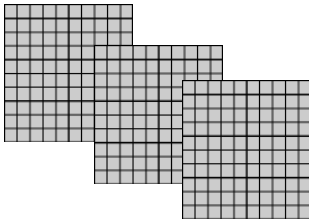
$$6 + 6 + 6 = 18$$

Write the number in standard form.

$$6000 + 90 + 4$$

Draw a shape with 5 angles.

What number is show below? _____



Finish the pattern.

170, 175, _____, _____, _____, _____,

Circle the 4th number in the pattern.. Write a doubles fact to equal the number you circled.

$$\underline{\quad} + \underline{\quad} = \underline{\quad}$$

Week 26 Day 4



Allison has these coins in her purse. How much money does she have? _____

If Allison uses the 2 quarters to buy a piece of candy that costs 34 cents, how much change will she get back? _____

How much money will Allison have left if she buys the candy? _____

Name: _____

Week 26 Day 5

Complete the problem.

$$\begin{array}{r} 45 \\ 36 \\ 28 \\ + 56 \\ \hline \end{array}$$

Write the numbers in order from least to greatest.

$$\begin{array}{l} 30 + 6 \\ 5 \times 7 \\ 47 - 10 \\ 338 - 300 \end{array}$$

_____, _____, _____, _____

Write the value of the underlined digit.

4384 _____

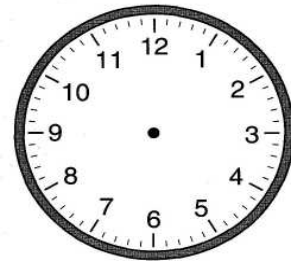
9006 _____

6826 _____

Write the number in standard form.

$$5000 + 400 + 8$$

Show 6:25 on both clocks.



_____ : _____

Circle the correct data set for the line plot below.

Week 26 WP

- A) 1, 2, 2, 3, 4, 4, 5, 6, 6, 6, 9
- B) 1, 3, 3, 4, 5, 6, 6, 8,
- C) 1, 2, 2, 4, 6, 6, 6, 9, 9

