

Name: _____

Week 2 Day 1

Add

$5 + 5 = \underline{\quad}$

$5 + 6 = \underline{\quad}$

$8 + 8 = \underline{\quad}$

$8 + 9 = \underline{\quad}$

$3 + 3 = \underline{\quad}$

$3 + 4 = \underline{\quad}$

Write the numbers in order from least to greatest.

56, 45, 87

_____ / _____ / _____

Write the value of the underlined digit.

78 _____

65 _____

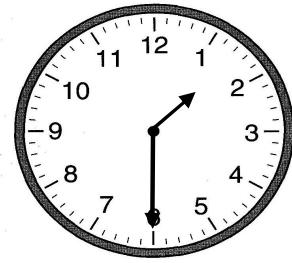
36 _____

Write <, >, or =

34 34

83 42

Write the time.



_____ : _____

Subtract

$7 - 3 = \underline{\quad}$

$9 - 4 = \underline{\quad}$

$5 - 2 = \underline{\quad}$

$11 - 5 = \underline{\quad}$

$11 - 6 = \underline{\quad}$

$15 - 7 = \underline{\quad}$

Write the numbers in order from least to greatest.

32, 75, 51

_____ / _____ / _____

Week 2 Day 2

How many tens and ones?

58

_____ tens


_____ ones

Write <, >, or =

87 58

39 44

Write the time.



_____ : _____

Name: _____

Week 2 Day 3

Add

$7 + 7 = \underline{\quad}$

$7 + 8 = \underline{\quad}$

$4 + 4 = \underline{\quad}$

$4 + 5 = \underline{\quad}$

$6 + 6 = \underline{\quad}$

$6 + 7 = \underline{\quad}$

Write the missing number.

44, , 46

68, 69,

 , 32, 33

Write the number.

1 ten

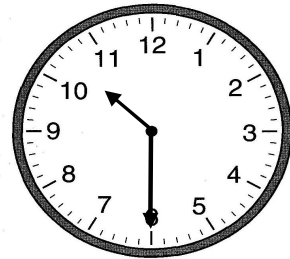
8 ones

Write $<$, $>$, or $=$

87 22

55 55

Write the time.



:

Week 2 Day 4

Subtract

$15 - 7 = \underline{\quad}$

$11 - 6 = \underline{\quad}$

$9 - 4 = \underline{\quad}$

$17 - 9 = \underline{\quad}$

$13 - 6 = \underline{\quad}$

$7 - 4 = \underline{\quad}$

Write the numbers in order from least to greatest.

84, 22, 65

_____, _____, _____

How many tens and ones?

81

 tens


 ones

Write $<$, $>$, or $=$

14 36

58 93

Write the time.



:

Name: _____

Week 2 Day 5

Add

$8 + 8 = \underline{\quad}$

$9 + 8 = \underline{\quad}$

$3 + 3 = \underline{\quad}$

$4 + 3 = \underline{\quad}$

$5 + 5 = \underline{\quad}$

$6 + 5 = \underline{\quad}$

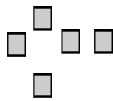
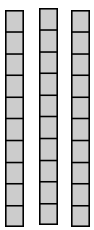
Write the missing number.

55, , 57

64, 65,

 , 51, 52

Write the number.




Write <, >, or =

89 89

22 45

Write the time.



:

Week 2 WP

Elijah had these coins in his pocket. How many more dimes would he need to have 80 cents?



_____ dimes