

Name: _____

CCSS 2.NBT.5 Fluently add and subtract within 100.....

2-Digit Addition and Subtraction With Regrouping

 Directions: Find the sums.

$$\begin{array}{r} 26 \\ +44 \\ \hline \end{array}$$

$$\begin{array}{r} 29 \\ +52 \\ \hline \end{array}$$

$$\begin{array}{r} 68 \\ -39 \\ \hline \end{array}$$

$$\begin{array}{r} 42 \\ +38 \\ \hline \end{array}$$

$$\begin{array}{r} 84 \\ -27 \\ \hline \end{array}$$

$$\begin{array}{r} 46 \\ -39 \\ \hline \end{array}$$

$$\begin{array}{r} 73 \\ -34 \\ \hline \end{array}$$

$$\begin{array}{r} 23 \\ +58 \\ \hline \end{array}$$

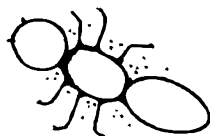
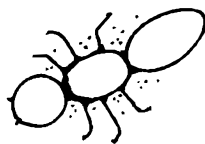
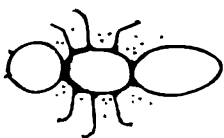
$$\begin{array}{r} 43 \\ +24 \\ \hline \end{array}$$

$$\begin{array}{r} 53 \\ -39 \\ \hline \end{array}$$

$$\begin{array}{r} 74 \\ -56 \\ \hline \end{array}$$

$$\begin{array}{r} 74 \\ +19 \\ \hline \end{array}$$

Score: _____ /12



Graphics/fonts copyright DJ Inkers. www.djinkers.com